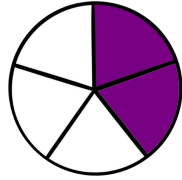
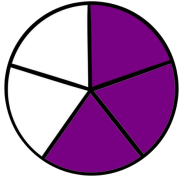
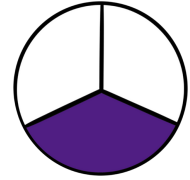
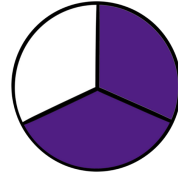


Comparing Fractions

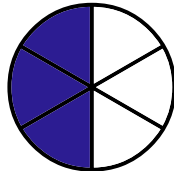
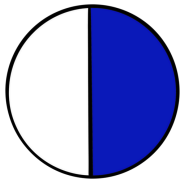
Use <, >, or = to compare the fractions.



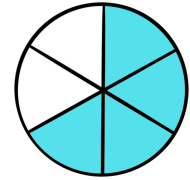
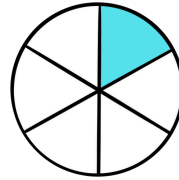
$\frac{3}{5}$ $\frac{2}{5}$



$\frac{2}{3}$ $\frac{1}{3}$

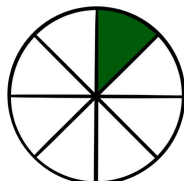
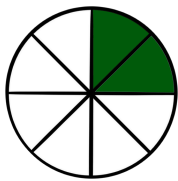


$\frac{1}{2}$ $\frac{3}{6}$

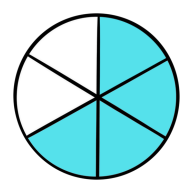
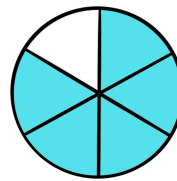


$\frac{1}{6}$ $\frac{4}{6}$

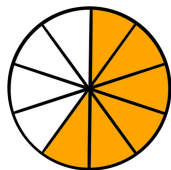
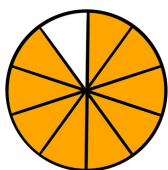
Write fraction of the colored part in each circle. Then, compare using >, <, or =.



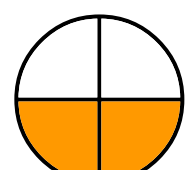
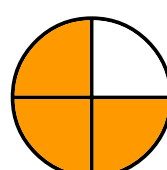
— —



— —



— —



— —