
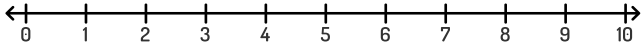


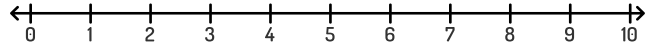
Count and Subtract



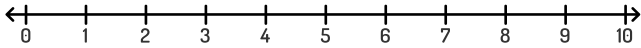
$$3 - 2 =$$



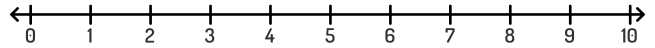

$$5 - 3 =$$



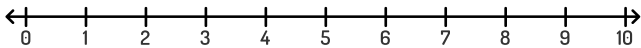
$$6 - 4 =$$



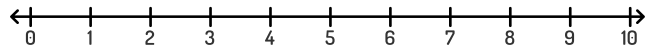
$$3 - 1 =$$



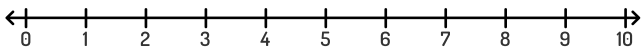
$$9 - 2 =$$



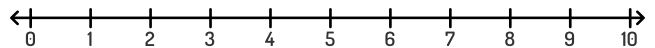
$$8 - 4 =$$



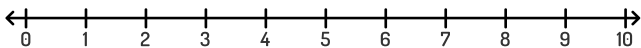
$$7 - 3 =$$



$$4 - 2 =$$



$$8 - 0 =$$



$$5 - 4 =$$

