
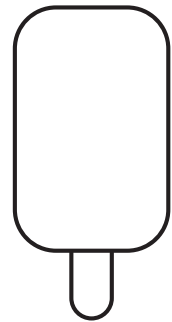
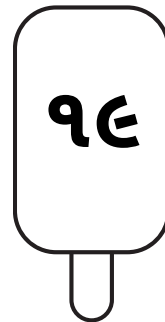
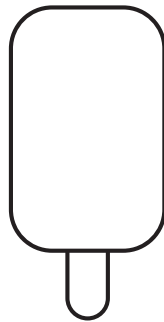


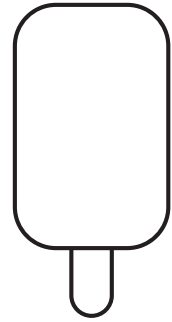

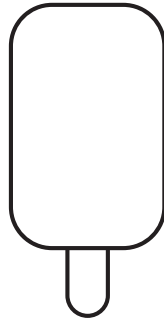


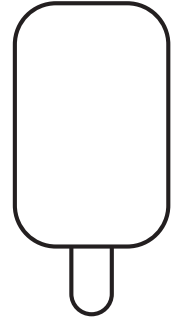
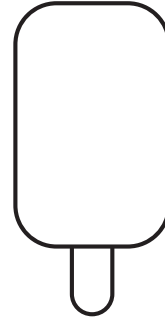

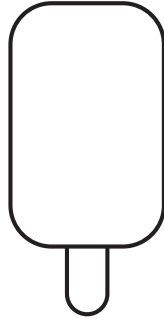

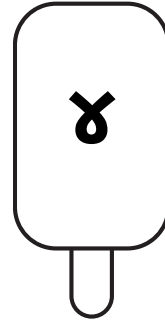
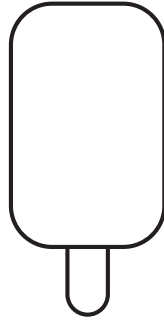





Name: Class: 

# MISSING NUMBERS



દરેક ખાલી જગ્યાને ખૂટતા નંબરોથી ભરો



Name: 

 Class: 

દરેક ખાનામાં ખૂટતી સંખ્યાઓ ભરો.




૧		૩	૪	
૬		૯		

૨	૪		૮	૧૦
		૧૬	૧૮	



૧		૫		૯
	૧૩	૧૫		



૨	૫		૧૧	
૧૭		૨૩		

	૧૦			૨૫
૩૦			૪૫	

Name: 

 Class: 

# ખૂટતા અંકો

ક્રમમાં ખૂટે છે તે નંબર ખાનામાં ભરો.

૧				૫
---	--	--	--	---

૮				૧૨
---	--	--	--	----

૬				૧૦
---	--	--	--	----

૧૭				૨૧
----	--	--	--	----

૧૧				૧૫
----	--	--	--	----

૧૯				૨૩
----	--	--	--	----

૧૬				૨૦
----	--	--	--	----

૨૫				૨૯
----	--	--	--	----

૧				૫
---	--	--	--	---

૫				૯
---	--	--	--	---

૧૧				૧૫
----	--	--	--	----

૧૫				૧૯
----	--	--	--	----

૨૧				૨૫
----	--	--	--	----

૨૫				૨૯
----	--	--	--	----

૩૧				૩૫
----	--	--	--	----


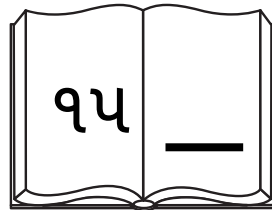
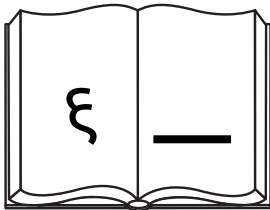
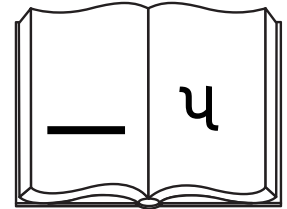

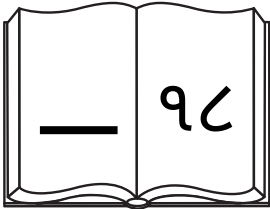

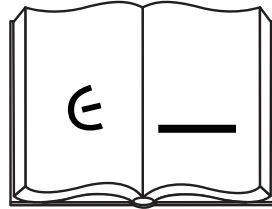
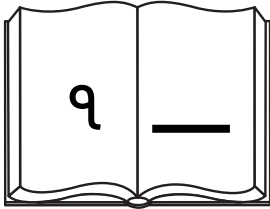
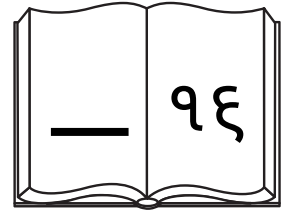
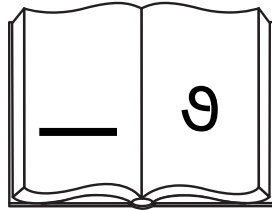
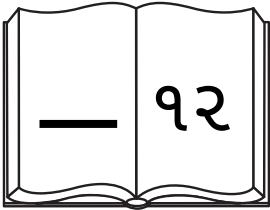
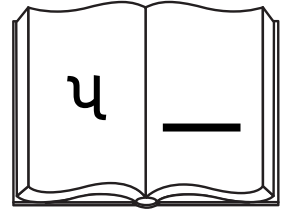
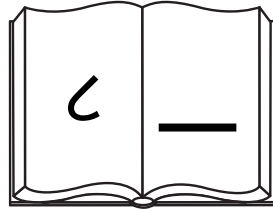
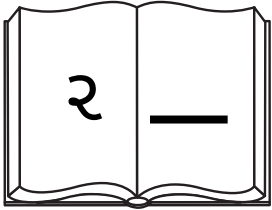
૩૫				૩૯
----	--	--	--	----

Name: 


 Class: 

# Missing Numbers

કયો નંબર પહેલા આવે છે? પછી કયો નંબર આવે છે? તેને જગ્યા પર લખો.



Name: 

 Class: 


# ગાણતરી ૧ થી ૧૦૦

૧	૨	૩	૪		૬	૭	૮	૯	૧૦
૧૧	૧૨	૧૩	૧૪	૧૫	૧૬	૧૭		૧૯	૨૦
૨૧		૨૩	૨૪	૨૫		૨૭	૨૮	૨૯	૩૦
૩૧	૩૨	૩૩		૩૫	૩૬	૩૭	૩૮	૩૯	૪૦
૪૧	૪૨	૪૩	૪૪		૪૬	૪૭	૪૮		૫૦
૫૧		૫૩	૫૪	૫૫	૫૬	૫૭	૫૮	૫૯	
૬૧	૬૨	૬૩	૬૪		૬૬		૬૮	૬૯	૭૦
	૭૨	૭૩		૭૫	૭૬	૭૭	૭૮		૮૦
૮૧	૮૨		૮૪	૮૫		૮૭		૮૯	૯૦
	૯૨	૯૩	૯૪	૯૫	૯૬		૯૮	૯૯	